

Sample Paper for SSC Section Officer Exam was a great hit. Second in the series is the Sample Paper for Maths (Arithmetic). This is as **SSC Tax Assistant Syllabus and Pattern**

1. The LCM of $\frac{2}{9}$, $\frac{4}{15}$ & $\frac{1}{30}$ is how many times the HCF of $\frac{7}{15}$, $\frac{21}{40}$ & $\frac{14}{15}$?

1. $\frac{160}{7}$
2. $\frac{7}{160}$
3. $\frac{120}{7}$
4. $\frac{90}{7}$

2. $0.0874 + 1.236 - 0.0012 + ? = 1.489$

1. 0.1568
2. 0.1578
3. -0.1668
4. 0.1658

3. 30% of 300 - 40% of 400 + 50% of 500 = ?

1. 1800
2. 180
3. 18
4. 18000

4. If $243 \times 162 = 39366$, then $3936.600 \div 0.243 = ?$

1. 1620
2. 16200
3. 162
4. 162000

5. $114.01 + 222.01 + ? = 400$

1. 63.98
2. 43.78
3. 736.02
4. -53.98

6. The difference between the circumference and the radius of a circle is 37 cm (use p

2. 14 cm

3. 33 cm

4. 37 cm

7. The LCM of two multiples of 12 is 1056. If one of the numbers is 132, the other number should be

1. 12

2. 72

3. 96

4. Data inadequate

8. The average of seven results is 5; the average of first three is 3, and that of the last three is 7. The fourth result is

1. 6

2. 5

3. 4

4. 3

9. A man walking at the speed of 4 kmph crosses a square field diagonally in 3 minutes. The area of the field is

1. 20000 sq m

2. 25000 sq m

3. 18000 sq m

4. 19000 sq m

10. The area of a rectangular field is 144 sq m. If the length is increased by 5 m, its area increases by 40 sq m. The length of the field is

1. 12 m

2. 14.4 m

3. 16 m

4. 18 m

11. A, B and C are partners and make a profit of Rs. 4800 which is distributed among them in the ratio 6:5:4. The difference of the amounts A and C received is

1. Rs. 640

2. Rs. 1290

3. Rs. 1280

4. Rs. 1600

12. A, B, & C enter into a partnership with investments in the ratio 3:4:9. If at the end of the year, B's share of profit is Rs. 6175, what is the total profit?

1. Rs. 24300

2. Rs. 24600

3. Rs. 24700

4. Rs. 24100

13. X and Y enter into a partnership. X contributes Rs. 8000 and Y contributes Rs.

share of each.(in Rs.)

1. X-3240, Y-4200, Z-2200

2. X-3360, Y-4400, Z-2100

3. X-3360, Y-4200, Z-2100

4. 3260, Y-4000, Z-2200

14. Umedh Singh and Zorawar Singh invested in a business. They earned some profit which they divided in the ratio 2:3. If Umedh Singh invested Rs. 24, the amount invested by Zorawar Singh was

1. Rs. 36

2. Rs. 16

3. Rs. 30

4. Rs. 48

15. Abdul and Aamir invest respectively Rs. 30000 and Rs. 40000 in a business. Abdul receives Rs. 100 per month out of the profit for running the business and the rest of the profit is divided in proportion to the investments. If in a year Abdul totally receives Rs. 3900, what does Aamir receive?

1. Rs. 3500 2. Rs. 3600

3. Rs. 3900

4. Rs. 4200

16. 7 women and 6 men can do what 4 men and 11 women can do in the same time. 19 women can do the same job in how much time?

1. Same

2. Half

3. One-third

4. Two-third

17. If A can walk a certain distance in 40 days when he takes rest 9 hours each day; how much long will he take to walk the same distance twice as fast and rest twice as long each day?

1. 50 days

2. 45 days

3. 38 days

4. 16 days

18. If 20 men or 25 women or 30 boys can do a piece of work in 16 days by working 10 hours a day, then how many men with 10 women and 18 boys can do $3\frac{1}{4}$ times the same work in 26 days by working 8 hours daily?

1. 35 men

2. 30 men

3. 40 men

4. 48 men

19. Some persons can do a job in 12 days. Two times the number of those persons

2. 4 days

3. 12 days

4. 3 days

20. 400 men working 9 hrs a day complete $\frac{1}{4}$ th of the work in 10 days. The number of additional men, working 8 hrs a day, required to done the remaining work in 20 days is

1. 675

2. 275

3. 250

4. 225

21. 25% of 240 will be how much more than 33.33% of 180?

1. 5

2. 10

3. 6

4. Nil

22. 350% of a number is what percent of 250% of that number?

1. 40%

2. 44%

3. 140%

4. 71%

23. If the length of a rectangle is increased by 20% and the width decreased by 20%, the area of the rectangle will

1. Decrease by 4%

2. Increase by 4%

3. Decrease by 1%

4. Not change at all

24. A shopkeeper increases the price of a commodity by 25% and again increases it by 20%. The net percent increase is

1. 45%

2. 40%

3. 50%

4. 47%

25. The cost of a pant is 60% of the cost of a coat and 300% of the cost of a shirt. If all three cost Rs. 2160, the cost of the shirt will be

1. Rs. 290

2. Rs. 280

3. Rs. 360

4. Rs. 240

26. If sold for Rs. 247.50, an object gives a profit of 12.5%. The cost price is

1. Rs. 210

2. Rs. 220

27. A fruit seller purchases oranges at the rate of 3 for Rs. 5 and sells them at 2 for Rs. 4. His profit in the transaction is

1. 20%
2. 25%
3. 15%
4. 10%

28. A merchant sold his goods for Rs. 75 at a profit percent equal to the cost price. His cost price is

1. Rs. 50
2. Rs. 60
3. Rs. 80
4. Rs. 100

29. A man buys an article at $\frac{3}{4}$ th of its value and sells it for 20% more than its value. His profit based on the cost is

1. 45%
2. 50%
3. 60%
4. 75%

30. The LCM of numbers 12, 18, & 24 is how much more than their HCF?

1. 66
2. 69
3. 70
4. 72

31. Find the minimum number of square tiles of equal size for the floor of a room which is 1 m 4 dm 7 cm long and 1 m 8 dm 2 cm wide.

1. 250
2. 266
3. 140
4. 145

32. The average of first five prime numbers is

1. 5.40
2. 5.70
3. 5.60
4. 5.80

33. The average weight of 8 men is increased by 1.5 kg when one of them who weighs 65 kg is replaced by a new man. The weight of the new man is

1. 76 kg
2. 76.5 kg
3. 76.7 kg
4. 77 kg

1. 20
2. 30
3. 40
4. 50

35. In an exam, the average was found to be 50 marks. After detecting computer errors, the marks of 100 candidates had to be changed from 90 to 60 each and the average came down to 45. The total number of candidates who took the exam was

1. 600
2. 700
3. 500
4. 400

Answers

1. 15221 6. 23214 11. 13312 16. 11242 21. 43134 26. 21131 31. 53411

More Sample Question Papers:

You can find more sample papers here: [Computer](#), [English](#), [Reasoning](#), [Maths](#), [General Knowledge](#)

Self Study Books

[Full Syllabus](#)

[Free GK](#)

[Mock Tests](#)



GJ Tutorial
Discover the Genius Inside You...

09872380199

[Click for more details...](#)

Related

SSC Section Officer
(Audit) PAPER II -
ARITHMETIC: Nov 2008
November 30, 2008
In "Previous Papers"

SSC Tax Assistant
Recruitment Exam -
English Grammar Sample
Questions
August 12, 2008
In "Sample Question

Syllabus - SSC
Recruitment of Section
Officer (Audit) Exam
July 22, 2008
In "Jobs and
Recruitment"

22 Comments

amey mohire on March 22, 2014 at 10:04 pm

please help me for Staff selection commision examination by providing required study material of aptitude and general awareness question and answers.

Reply

Sarbjit on March 23, 2010 at 10:23 am

Please give me the study material required for the clerical staff post exam which taken by Bank of Baroda and last sample papers.
thnx

Reply

pooja on March 15, 2010 at 8:29 pm

Please give me the study material required for the PO post exam which taken by Bank of Baroda and last sample papers.

thanks and regards

Reply

pooja on March 15, 2010 at 8:28 pm

Please give me the study material required for the PO post exam which taken by Bank of Baroda and last sample papers.

please do the needful

thanks and regards

Reply

sanjeev on March 12, 2010 at 9:28 pm

Sir,

Please provide me the sample paper of allahabad bank (clerk).I will be very thankful to you.

Reply

please send me previous year question papers of SSC combined graduate level exam.



shankar on March 4, 2010 at 8:47 pm

model questionpaper



ajay kumar on February 23, 2010 at 1:16 pm

please sent me question paper of ssc 2010 examination paper on my email id.




vinod on February 2, 2010 at 11:25 am

Please give me the study material required for the mpssc preliminary exam and last sample papers.

please do the needful

thanks and regards



mobeen on January 31, 2010 at 9:10 am

please send me deta entry test pepar urjan please.




prajakta on January 18, 2010 at 11:33 pm

i will be thankful to you if u provide me sample papers for sbi bank PO exams & study material for the same



govindan on June 15, 2009 at 11:14 pm

i want to indian bank previous year modul question paper



I want clerk exam study material for federal bank&bank of india

Alok Asthana on May 21, 2009 at 10:51 am

Please give me the study material required for the clerk post exam which taken by IBPS and last sample papers.
Thank You really provide a great things....

Reply

lavanya on April 28, 2009 at 4:47 pm

Please give me the study material required for the clerk post exam which taken by indian bank and last sample papers.

please do the needful

thanks and regards

lavanya

Reply

lavanya on April 28, 2009 at 4:45 pm

I want Sample question paper indian bank exam clerical posts

Reply

simy on April 14, 2009 at 8:20 pm

please sent me ssc section officer(coomercial audit)sample paper and previous paper,which included part1 and part2

Reply


subi on March 28, 2009 at 5:22 pm

If i am not wrong, in ssc tax assistant examination , the maths portion is purely descriptive and not objective as shown by you. The question paper is returned to the candidates for their future references.

Please avoid such mistakes.

Reply

I WANT GRAMEENA VIRAS BANK OFFICE ASSISTANTS MODEL PAPERS .PLS GIVE ME RESPOND .THANK YOU .



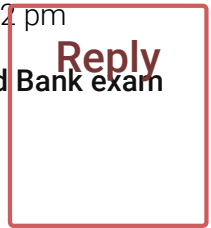
SARAVANAMOORTHY on December 26, 2008 at 4:43 pm

i want a sample question paper SBI and Banking exam clerical posts.



SARAVANAMOORTHY on December 26, 2008 at 4:42 pm

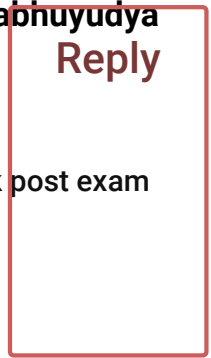
i want a sample question paper in SBI recruitments and Bank exam clerical posts.



Required study material for the Clerks exam in abhuyudya bank

on November 25, 2008 at 11:19 am

Please give me the study material required for the clerk post exam which taken by IBPS and last sample papers.
Thank You really provide a great things....



Follow GJ Tutorial



Facebook



Twitter



Google+



YouTube

[Subscribe for free...](#)

Get Jobs via Email

Email Address

Subscribe

[Home](#)

[GJ Notes](#)

[Contact Us](#)

[Disclaimer](#)

[Privacy Policy](#)



© GJ Tutorial